

BUDHA DAL PUBLIC SCHOOL PATIALA
FINAL TERM EXAMINATION (MARCH 2025)

Subject : EVS
Class : II (Set-A)

Name : _____

Roll no. _____

Sec : _____

Time : 2 ½ hrs

Maximum Marks: 60

A. Choose the correct answer

(10)

1. Which of the following does not make use of air?

a) sailing a boat

b) a burning candle

c) a bucket filled with water

d) flying a kite

2. Which of the following objects will form a dark shadow?

a) glass

b) brick

c) water

d) butter paper

3. Which of the following is used to make print on clothes?

a) spices

b) sugar

c) chocolate

d) plant colour

4. Which is the fastest type of transport from the following ?

a) air

b) water

c) land

d) railway

5. Which of the following is a useful insect to us?

a) ant

b) cockroach

c) mosquito

d) honey bee

6. Which of the following activities does not need water?

- a) sleeping b) bathing c) brushing teeth d) cooking

7. Which of the following do we get from plants?

- a) milk b) meat c) bananas d) eggs

8. What does a boat travel through?

- a) land b) air c) water d) railway

9. _____ do not need to drink water as they live in dry and hot places.

- a) Elephants b) Polar bears c) fish d) Kangaroo rats

10. Which of the following insects spoils our stored food grains?

- a) butterfly b) honeybee c) mosquito d) ant

B. Match the following

(2)

1. Speed limit



2. No parking



3. No right turn



4. No overtaking



C. Fill in the blanks.

(5)

1. People who work on _____ are called sailors.
2. The insects that fly have _____.
3. You write on me .I am _____.
4. Air has no _____, _____ and colour.
5. Shadows are formed when any object _____ the light.

D. Write True or False.

(5)

1. Animals will not become sick in the hot sun without water. _____
2. We feel hot when we stand in the shadow of a tree. _____
3. We eat the stem of the potato plant. _____
4. Cockroaches hide in the dark corners of the house. _____
5. We can feel air. _____

E. Answer the following questions.

Q1. Name one popular drink that we get from plants (1)

Q2. What do traffic police ensure? (1)

Q3. Name any two public transport vehicles. (2)

a. _____ b. _____

Q4. Name two plants used to prepare medicines. (2)

a. _____ b. _____

Q5. Write two uses of beeswax. (2)

Q6. What is a storm ? (2)

Q7. What is a shadow? (2)

Q8. Why do plants need water?

(2)

Q9. Name any two things we get from plants that we use in our food. (2)

a. _____ b. _____

Q10. What may happen if we do not get water to bath or wash our clothes? (3)

Q11. The tubes used in swimming pools float on water. Give reasons. (3)

Q12. Write the steps to make chocolate.

(3)

F. Draw and label the life cycle of a butterfly.

(3)

G. Name the following:

(5)

1. A means of transport that we use on land.

2. An insect that cannot fly.

3. A storm that brings heavy rain and lightning.

4. One word for moving air.

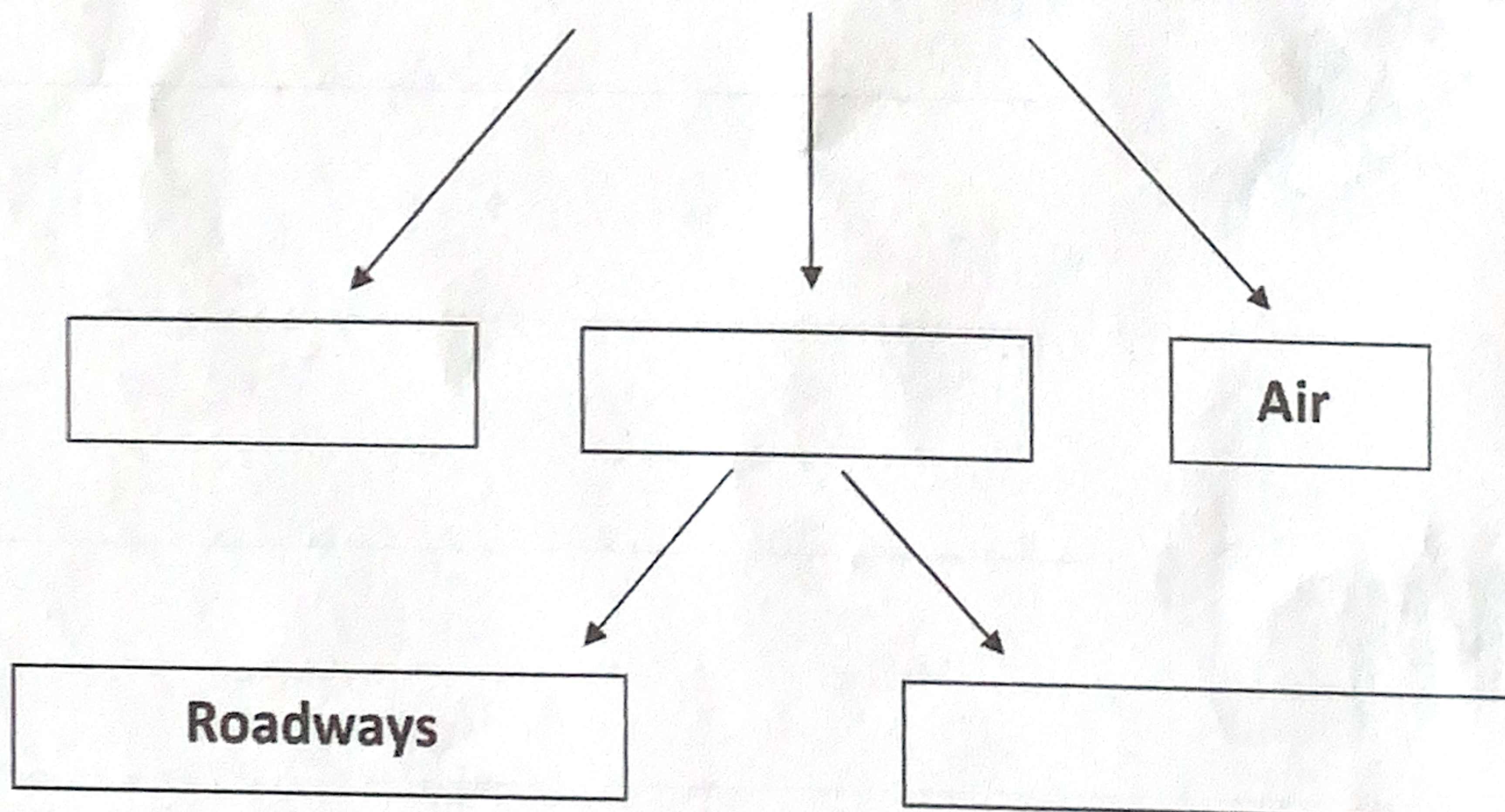
5. What does the following picture show ?



H.

Types /means of transportation





(3)



I. Choose the correct words from the brackets and complete the following table.

(2)

(thunderstorm, dust storm, snowstorm, sandstorm, rainstorm)

Types of storms	
	<hr/>
	<hr/>
	<hr/>
	<hr/>